



**DELHI PUBLIC SCHOOL,  
Vasant Kunj New Delhi - 110070**

website : [www.dpsvasantkunj.com](http://www.dpsvasantkunj.com), [email-principal@dpsvasantkunj.com](mailto:email-principal@dpsvasantkunj.com)

**HOLIDAY HOMEWORK**

**CLASS – III**

**2026-2027**

*Dear Parents,*

*Vacation is an excellent time to learn new skills. It is a welcome break for the children to enjoy and explore things in their own way. Just the right time to let the children do some creative work.*

*Here are some interesting and fun-filled assignments for the children to learn and keep them occupied during the holidays. These assignments have been designed to ensure that the children enjoy and learn at the same time.*

*To establish productive engagement during the holidays and continued academic growth, we have also designed a set of competency-based questions in English, Maths & EVS, as part of the holiday homework. The responses should be filled in the OMR sheet provided for each subject.*

*We encourage the students to complete the homework independently, with minimal guidance, to build confidence and ownership of their learning.*

*Let's work together towards the betterment of the students.*

**Happy Holidays!!**

**Warm Regards**

**DPS Vasant Kunj**

## ENGLISH

### Picture-Based Questions

Look at the given pictures and choose the correct option:

1. The ship is \_\_\_in the deep blue sea.

- A. whistling
- B. soaring
- C. sinking



2. The wind is \_\_\_so hard.

- A. snowing
- B. sighing
- C. blowing



### Sentence Structure

3. **Choose the correct sentence :**

- A. They has finished their work.
- B. She have a blue bag.
- C. He has eaten his lunch.
- D. I has a new pencil.

4. **Choose the part of the sentence that has an error :**

The candies were distributed between all the students.

- A. The candies
- B. were distributed
- C. between all
- D. the students

**Choose the correct question for each answer :**

5. I am making a kite.

- A. What are you making?
- B. When are you making the kite?
- C. Which kite is yours?

6. Zoe was absent yesterday.
- A. When was Zoe absent?
  - B. Who is Zoe?
  - C. What is Zoe doing?

### Inference-Based Questions

**Read the given sentences and choose the correct answer :**

7. Maya is helping her mother carry groceries home. One of the bags has fruits in it. As she walks, the bag tears open and apples start rolling on the road. A boy on a bicycle is coming fast toward the apples. What happens?
- A. The boy stops in time.
  - B. The apples roll back into the bag.
  - C. The boy runs over the apples.
  - D. The apples disappear.

8. Joy sat on the bench at the baseball field and waited. She didn't like waiting alone. All the other kids had been picked up by their parents. Where was her mother? Suddenly, her mother came running to her, "Oh Joy, I am so sorry. Next time I will make myself a note."

The main idea of the paragraph is \_\_\_\_\_

- A. Joy's mother forgot to pick her up.
- B. Joy hated sitting alone.
- C. Joy plays baseball.
- D. Joy's mother writes notes.

Jessica was snoring loudly at her desk. It was the middle of the day but she just couldn't keep her eyes open. She had been up all night, studying for this test and now she couldn't even concentrate. The words were blurry and she couldn't focus on each question. At the end of the hour, she handed the test to the teacher with a heavy heart. She wasn't looking forward to getting her results back for this test!

9. How did Jessica likely perform in the test?
- A. Very well
  - B. Average
  - C. Poorly
  - D. Perfect

10. Why were the words blurry for Jessica?
- A. She forgot her glasses.
  - B. She was very tired.
  - C. The paper was unclear.
  - D. The classroom was dark.

**Sequencing**

11. Arrange the given sentences in the logical order. Write number 1 next to the sentence that you think should come first in the story.
- A. He covered the seed with soil. \_\_\_\_
  - B. Ben watered the seed every day. \_\_\_\_
  - C. One sunny morning, Ben decided to plant a seed. \_\_\_\_
  - D. He dug a small hole in the soil and dropped the seed into the soil. \_\_\_\_

**Complete the conversation:**

12. Riya : \_\_\_\_?

Shaurya : Two, I speak German and English.

- A. Where do you study?
- B. When is your English class?
- C. How many languages do you speak?
- D. Can you speak Italian?

13. Richa: \_\_\_\_, where is the museum?

Man: Go straight ahead, turn right and pass the park. It's on the left, opposite the station.

- A. You are welcome
- B. Not at all
- C. Thanks
- D. Excuse me

14. Teacher: Did you understand what was taught in the class ?

Student : No, \_\_\_\_\_.

- A. I can't.
- B. I wouldn't.
- C. I could.
- D. I didn't.

15. Mother: What time does your movie finish?

Son: It'll be \_\_\_in a second, I promise.

- A. next to
- B. over
- C. under
- D. here

### **Vocabulary and Grammar**

16. Choose the word that means the same as 'move forward on the hands and knees':

- A. slither
- B. walk
- C. rush
- D. crawl

17. Where can we use a comma (,) in the given sentence?

'My mother packed some sandwiches fruits and chocolates in my lunch box today.'

- A. after mother
- B. before lunch box
- C. between sandwiches and fruits
- D. between packed and some

18. The mouse nibbled on the cheese.

What does the word nibbled mean?

- A. dance
- B. ate
- C. ran
- D. write

19. What is the meaning of the underlined word?

The boat sailed gently on the tranquil lake.

- A. calm
- B. stormy
- C. upset
- D. beautiful

20. My sister's room is a mess, but my room is shipshape. Shipshape means\_\_\_\_\_
- A. clean
  - B. pain
  - C. empty
  - D. shake
21. Please \_\_\_your shoes before you enter the house.
- A. take on
  - B. take up
  - C. take off
  - D. take in
22. \_\_\_\_\_jacket before going out.
- A. Put in
  - B. Put up
  - C. Put on
  - D. Put off
23. My father grows spinach \_\_\_\_\_the autumn season.
- A. beside
  - B. of
  - C. on
  - D. during
24. Everyone brought \_lunchbox to school.
- A. his
  - B. her
  - C. their
  - D. our
25. Choose the pair of words that have similar meanings:
- A. happy, cheerful
  - B. hot, cold
  - C. noisy, quiet
  - D. tired, energetic
26. Choose the opposite of 'bland'
- A. silly
  - B. little
  - C. tasty
  - D. voluminous

27. Choose the correct option to complete the sentences :

The burglar left muddy \_\_\_\_\_ on the floor and \_\_\_\_\_ on the wall. The detective used a \_\_\_\_\_ glass to look for clues.

- A. footprints, magnifying, fingerprints
- B. magnifying, footprints, fingerprints
- C. fingerprints, magnifying, footprints
- D. footprints, fingerprints, magnifying

28. The film was really \_\_\_\_\_. I wish we had seen something else.

- A. boring
- B. bore
- C. bores
- D. bored

29. What is the correct spelling of the word that means 'something extremely impressive' ?

- A. magnificent
- B. magnificient
- C. magnifisent
- D. maginificent

30. Identify the INCORRECT spelling:

- A. tomorrow
- B. writing
- C. becouse
- D. cheerfully

31. There is someone \_\_\_\_\_ the door.

- A. honking
- B. knocking
- C. rushing
- D. tearing

32. I've got an exam tomorrow. I am really \_\_\_\_\_. It is my worst subject.

- A. excited
- B. nervous
- C. happy
- D. active

**Replace the underlined word with correct synonyms (similar words)**

33. The little boy became drowsy as the day turned into night.
- A. desperate
  - B. active
  - C. tired
  - D. annoyed
34. When the boy became the king, he ruled with wisdom.
- A. many riches
  - B. understanding
  - C. no help
  - D. politeness
35. My head hurts so much, I feel terrible today.
- A. wonderful
  - B. awful
  - C. good
  - D. excited

**Fill in the blanks with the correct collective nouns:**

36. The \_\_\_ of students visited the museum.
- A. class
  - B. band
  - C. troupe
  - D. bunch
37. A \_\_\_ of stars could be seen twinkling in the night sky.
- A. trip
  - B. fleet
  - C. galaxy
  - D. class
38. A \_\_\_ of thieves was caught red handed while robbing the store.
- A. crew
  - B. army
  - C. troupe
  - D. gang

39. What type of noun is 'river'?
- A. Proper noun
  - B. Common noun
  - C. Collective noun
  - D. Abstract noun

### Reading Comprehension

I. Read the given letter and choose the correct answer:

Letter to Rudolph, Santa's Reindeer

Dear Rudolf

My name is Meethu. I am a baby parrot! I live with my friend in the great city of Mumbai in the state of Maharashtra. Of course, that's in India, but I'll bet you knew that! Rudolph, some things that I might like for Christmas this year are two bags full of my favourite seed mix, lots of green chillies, and another baby parrot to play with. And please don't forget to put in a good word for my friend with Santa! He is very nice. He doesn't keep me in a cage.

Lots of Love

Meethu

40. What does Meethu say about cages?
- A. He likes cages.
  - B. He is kept in a cage.
  - C. His friend does not keep him in a cage.
  - D. He wants a bigger cage.
41. Meethu asks for \_\_\_\_
- A. two things
  - B. three things
  - C. five things
42. Meethu asks Rudolf for things to
- A. eat
  - B. drink
  - C. read

43. Why does Meethu want a baby parrot?
- A. to sell it
  - B. to play with it
  - C. to teach it
  - D. to give it away
44. What does the letter tell us about Meethu's friend?
- A. He doesn't give him food.
  - B. He is kind and caring.
  - C. He is careless.
  - D. He is strict.
45. What is the meaning of 'of course'?
- A. maybe
  - B. surely
  - C. never
  - D. rarely

**II. Read the given paragraph and choose the correct answer:**

Tommy was a curious boy who loved exploring his garden. One afternoon, while digging near a big tree, he found a small box buried in the soil. Excitedly, he opened the box and saw a shiny key inside.

Tommy wondered what the key could open. He looked around and noticed an old wooden chest near the garden shed. The chest was locked! Tommy tried the key, and to his surprise, it fit perfectly.

Inside the chest, Tommy found colourful stones, some old coins, and a small notebook. The notebook had drawings and stories about his grandfather's adventures when he was young.

Tommy was very happy to find the treasure. He decided to keep the key safe and learn more about his grandfather's stories. From that day, Tommy spent many afternoons reading the notebook and imagining all the adventures.

46. What did Tommy find buried in the garden?
- A. a wooden chest
  - B. a small box
  - C. a notebook
  - D. a bag

47. What did Tommy find inside the chest?
- A. only coins
  - B. clothes and toys
  - C. stones, coins and a notebook
  - D. books and papers
48. Whose stories were written in the notebook?
- A. Tommy's father
  - B. Tommy's friend
  - C. Tommy's grandfather
  - D. Tommy himself
49. Why was Tommy excited after finding the box?
- A. He wanted to throw it away.
  - B. He hoped it had something special.
  - C. He was scared.
  - D. He wanted to hide it.
50. What kind of person do you think Tommy is?
- A. careless and lazy
  - B. curious and adventurous
  - C. rude and angry
  - D. quiet and shy

## OMR Answer Sheet (ENGLISH)

Name of Student: \_\_\_\_\_

Class: \_\_\_\_\_ Section: \_\_\_\_\_ Subject: \_\_\_\_\_

1. Ⓐ Ⓑ Ⓒ Ⓓ	17. Ⓐ Ⓑ Ⓒ Ⓓ	34. Ⓐ Ⓑ Ⓒ Ⓓ
2. Ⓐ Ⓑ Ⓒ Ⓓ	18. Ⓐ Ⓑ Ⓒ Ⓓ	35. Ⓐ Ⓑ Ⓒ Ⓓ
3. Ⓐ Ⓑ Ⓒ Ⓓ	19. Ⓐ Ⓑ Ⓒ Ⓓ	36. Ⓐ Ⓑ Ⓒ Ⓓ
4. Ⓐ Ⓑ Ⓒ Ⓓ	20. Ⓐ Ⓑ Ⓒ Ⓓ	37. Ⓐ Ⓑ Ⓒ Ⓓ
5. Ⓐ Ⓑ Ⓒ Ⓓ	21. Ⓐ Ⓑ Ⓒ Ⓓ	38. Ⓐ Ⓑ Ⓒ Ⓓ
6. Ⓐ Ⓑ Ⓒ Ⓓ	22. Ⓐ Ⓑ Ⓒ Ⓓ	39. Ⓐ Ⓑ Ⓒ Ⓓ
7. Ⓐ Ⓑ Ⓒ Ⓓ	23. Ⓐ Ⓑ Ⓒ Ⓓ	40. Ⓐ Ⓑ Ⓒ Ⓓ
8. Ⓐ Ⓑ Ⓒ Ⓓ	24. Ⓐ Ⓑ Ⓒ Ⓓ	41. Ⓐ Ⓑ Ⓒ Ⓓ
9. Ⓐ Ⓑ Ⓒ Ⓓ	25. Ⓐ Ⓑ Ⓒ Ⓓ	42. Ⓐ Ⓑ Ⓒ Ⓓ
10. Ⓐ Ⓑ Ⓒ Ⓓ	26. Ⓐ Ⓑ Ⓒ Ⓓ	43. Ⓐ Ⓑ Ⓒ Ⓓ
11. Ⓐ Ⓑ Ⓒ Ⓓ	27. Ⓐ Ⓑ Ⓒ Ⓓ	44. Ⓐ Ⓑ Ⓒ Ⓓ
12. Ⓐ Ⓑ Ⓒ Ⓓ	28. Ⓐ Ⓑ Ⓒ Ⓓ	45. Ⓐ Ⓑ Ⓒ Ⓓ
13. Ⓐ Ⓑ Ⓒ Ⓓ	29. Ⓐ Ⓑ Ⓒ Ⓓ	46. Ⓐ Ⓑ Ⓒ Ⓓ
14. Ⓐ Ⓑ Ⓒ Ⓓ	30. Ⓐ Ⓑ Ⓒ Ⓓ	47. Ⓐ Ⓑ Ⓒ Ⓓ
15. Ⓐ Ⓑ Ⓒ Ⓓ	31. Ⓐ Ⓑ Ⓒ Ⓓ	48. Ⓐ Ⓑ Ⓒ Ⓓ
16. Ⓐ Ⓑ Ⓒ Ⓓ	32. Ⓐ Ⓑ Ⓒ Ⓓ	49. Ⓐ Ⓑ Ⓒ Ⓓ
	33. Ⓐ Ⓑ Ⓒ Ⓓ	50. Ⓐ Ⓑ Ⓒ Ⓓ

## HINDI

" अपनों के संग दिन बिताओ  
मेहनत से तुम मत घबराओ  
छुट्टियाँ केवल खेल नहीं  
कुछ नया सीखकर दिखलाओ "

प्यारे बच्चों, शीष्मकालीन अवकाश विद्यार्थियों के जीवन का महत्वपूर्ण समय होता है। यह अपनी प्रतिभा को निखारने का सबसे सुंदर समय है। आइए, हिन्दी भाषा से मित्रता करते हुए खेल-खेल में और मस्ती के साथ हम विभिन्न गतिविधियों के माध्यम से अपने समय का सदुपयोग करते हैं।

### 1. नन्हा शब्द-कोष

#### **निर्देश:-**

प्रतिदिन एक नया शब्द खोजें और उन्हें अर्थसहित एक डायरी में लिखिए। महीने के अंत में 30 शब्दों का आपका अपना "शब्द खजाना" तैयार होगा। कुछ पृष्ठों को रिक्त छोड़ दीजिए ताकि भविष्य में इसमें नए शब्द जोड़ सकें।

#### **प्रस्तुति -**

- एक डायरी लें। उसमें कॉलम बनाएँ।
- रोज़ 1 नया हिन्दी शब्द अर्थसहित खोजें और लिखें।
- आप चाहें तो अधिक भी लिख सकते हैं।

### 2. मेरा नाम - मेरी पहचान

#### **निर्देश:**

अपने नाम का अर्थ और उसका महत्व पता करते हुए उसे शुद्ध व सुंदर लिखना सीखें।

#### **प्रस्तुति -**

- A4 Size शीट लें, उससे एक भित्ति अलंकरण (wall hanging) बनाएँ।
- बीच में अपना नाम हिन्दी में बड़े और स्पष्ट अक्षरों में लिखें।
- नाम को रंगों, बॉर्डर, फूल-पतियों या चित्रों से सजाएँ चाहें तो अपने नाम का अर्थ भी लिख सकते हैं।

## MATHS

1. The "Tigers" scored more points than the "Dolphins" but fewer points than the "Eagles". Which team scored the most points?

- A. The Dolphins  
B. The Eagles  
C. The Tigers  
D. Both Tigers and Dolphins

2. Yesterday was Thursday. What day is tomorrow?

- A. Wednesday  
B. Friday  
C. Saturday  
D. Sunday

3. Look at these numbers: 57, 86, 71, 76  
Which two numbers have a sum of 143?

- A. 86 and 76  
B. 71 and 76  
C. 57 and 86  
D. 57 and 76

4. Pia put 70 cups in the first stack, 80 cups in the second stack, and 90 cups in the third stack. If this pattern continues, how many cups will Pia put in the fifth stack?

- A. 100  
B. 108  
C. 106  
D. 110

5. If a month ends on a Wednesday, on what day does the next month begin?

- A. Thursday  
B. Monday  
C. Wednesday  
D. Tuesday

6. What is the missing number that makes the number sentence true ?

$$? + 192 + 78 = 330$$

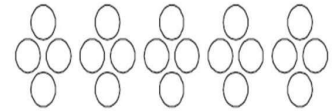
- A. 60  
B. 70  
C. 58  
D. 59

7. Look at the given pattern :  $\triangle \star \diamond \triangle \star \diamond \triangle \star \diamond \triangle$  ? ? ?  
Which is the missing part ?

- (A)  $\star \diamond \triangle$       (B)  $\triangle \triangle \triangle$       (C)  $\star \triangle \triangle$       (D)  $\star \star \star$

8. Which number sentence matches the given picture ?

- (A)  $4 + 5$       (B)  $5 - 4$   
(C)  $4 \times 5$       (D)  $20 \times 5$



9. Ritik has 30 eggs. He has 2 empty egg cartons that can hold 9 eggs per carton.  
How many eggs are left with him ?

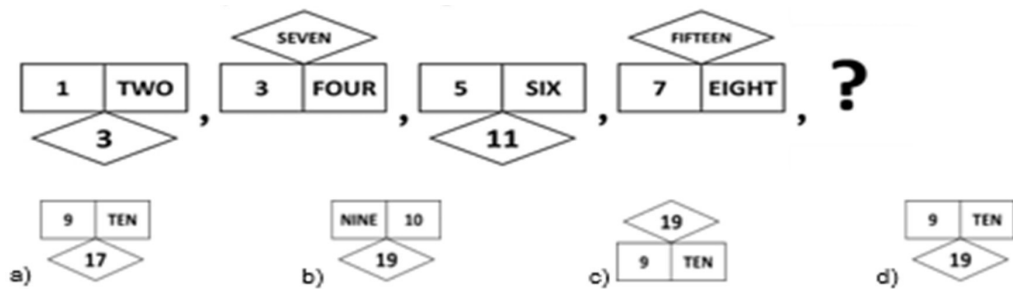
- A. 6      B. 12  
C. 18      D. 15

10. Which sign should be placed in the blank ?

$$(192 \text{ \_\_\_ } 8) - 12 = 188$$

- A. +      B. -  
C.  $\times$       D) None of these

11. What will come in place of '?' in the given series?



12. I am greater than 260 but less than 290. When you add my first and third digits you will get 9. Which number am I ?

- A. 277      B. 257  
C. 279      D. 269

13. Which one of the following is true ?

A.  $1049 = 100 + 49$

B.  $6745 = 7000 - 255$

C.  $8465 = 8000 + 400 + 56$

D.  $5489 = 2000 - 489$

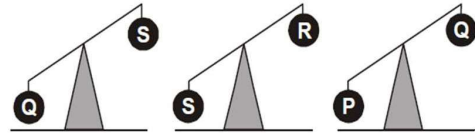
14. Which ball is the lightest in the given three figures ?

(A) P

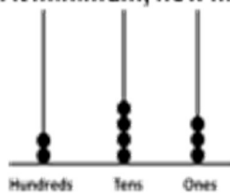
(B) Q

(C) R

(D) S



15. At minimum, how many more beads are required to show number 496 on the given abacus?



a) 487

b) 253

c) 10

d) 11

16.


There are \_\_\_\_\_ triangles in the given figure.

(A) 8

(B) 9

(C) 10

(D) 11



17.

What is the digit missing from the box?

(A) 6

(B) 8

(C) 7

(D) 9

$$\begin{array}{r} 9857 \\ - 79\boxed{?}8 \\ \hline 1879 \end{array}$$

18.

How many numbers will remain after Sam cancels all numbers less than 432 and all numbers greater than 567 in the set given below?

451, 430, 568, 411, 392, 517, 533, 578, 420, 525, 566, 616, 571, 436

a) 5

b) 8

c) 7

d) 8





29. Find the missing number.

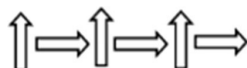





- A. 12                      B. 42                      C. 48                      D. 24

30. Look at this pattern of shapes.



Which of these shows the same kind of pattern?

- A.                       B. 
- C.                       D. 

31. A, B, and C have some amount of money (in rupees) as shown below:

A = 50, B = 100, and C = 150

How much money should B and C together give to A such that each of them ends up with the same amount of money?

- a) 15                      b) 25                      c) 50                      d) 75

32. Look at the number sentence below.

$$\square + 67 = 210$$


Which number will come in  $\square$  ?

- A. 247                      B. 143  
C. 188                      D. 177









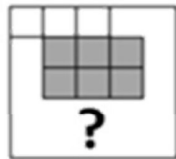
43. Look at the card pattern below.



Which of the following should be the next card in this pattern?

- A.  B.  C.  D. 
- Option A shows a 6 of Clubs with 6 black club symbols in two columns of 3. Option B shows a 2 of Hearts with 2 red heart symbols in a vertical column. Option C shows a 2 of Clubs with 2 black club symbols in a vertical column. Option D shows a 1 of Hearts with 1 red heart symbol in the center.

44. Given below is an incomplete grid. Which option will complete the grid such that ALL the grey boxes TOGETHER form a square?



- a)  b)  c)  d) 
- Options a, b, c, and d show different 2x2 grey squares that could be placed in the bottom-right area of the grid to complete it.

45. A shopkeeper sells eggs in tray of 6 eggs as shown in an image below.

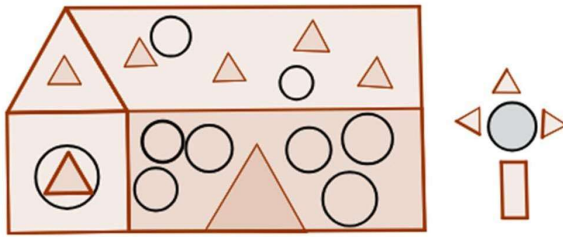


If I want 30 eggs, how many such trays should I ask for?

- A. 5      B. 6      C. 24      D. 30



49. How many circles are there in the given figure?



A. 17

B. 10

C. 14

D. 15

50. Look at this shape.



What will this shape look like when turned?



## OMR Answer Sheet (MATHS)


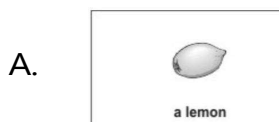
Name of Student: \_\_\_\_\_

Class: \_\_\_\_\_ Section: \_\_\_\_\_ Subject: \_\_\_\_\_

1. A B C D	17. A B C D	34. A B C D
2. A B C D	18. A B C D	35. A B C D
3. A B C D	19. A B C D	36. A B C D
4. A B C D	20. A B C D	37. A B C D
5. A B C D	21. A B C D	38. A B C D
6. A B C D	22. A B C D	39. A B C D
7. A B C D	23. A B C D	40. A B C D
8. A B C D	24. A B C D	41. A B C D
9. A B C D	25. A B C D	42. A B C D
10. A B C D	26. A B C D	43. A B C D
11. A B C D	27. A B C D	44. A B C D
12. A B C D	28. A B C D	45. A B C D
13. A B C D	29. A B C D	46. A B C D
14. A B C D	30. A B C D	47. A B C D
15. A B C D	31. A B C D	48. A B C D
16. A B C D	32. A B C D	49. A B C D
	33. A B C D	50. A B C D



6. Which of these hands moves the FASTEST in a clock?  
A. the hour hand  
B. the minute hand  
C. the second hand  
D. all move at the same speed
7. Arwin lives near river side. Every day he throws kitchen wastes in the river. Unknowingly he is polluting which of the following resources?  
A. air  
B. water  
C. soil  
D. all of these
8. Which of the following kind of houses is most effective in a place that is very hot and dry?  
A. a house made of bricks and mortar  
B. a house made up of ice  
C. a house made up of day and thatch or coconut branches  
D. all of these
9. Which of these could weigh about 1Kg?



10. Burning of fire needs \_\_\_\_.  
A. carbon dioxide  
B. matchstick  
C. water vapour  
D. oxygen
11. Shriram and Kabir were cycling one morning. Shriram saw the Sun on his LEFT while Kabir saw it on his RIGHT.

Based on this, which of the following statements is true?

- A. they were riding towards each other.  
B. they were both riding in the same direction.  
C. Shriram was riding at 7 am and Kabir was riding at 9 am.  
D. Shriram was looking through his left eye and Kabir through his right eye.


12. The sign below must be in front of a \_\_\_\_\_




- A. railway Line
- B. hospital
- C. park
- D. market

13. Which of these can be used to find out how long a day is?

A.



B.



C.



D.



14. Before eating food, we must wash our hands with soap and water so that \_\_\_\_\_.

- A. our hands become nice and soft
- B. the food we eat becomes fresh and healthy
- C. the germs present in the water are washed away
- D. the germs present on our hands are washed away

15. Match the following:

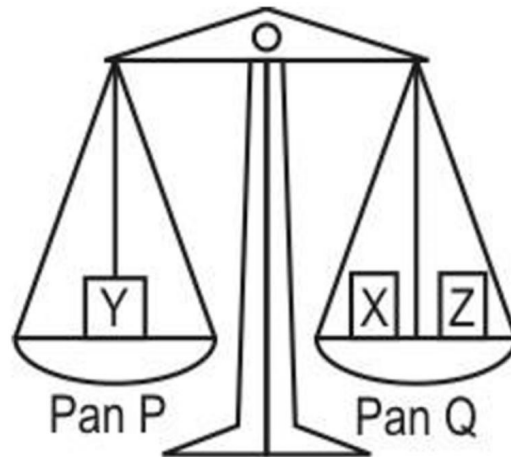
(i)	Sun	[A]	Moving air
(ii)	Wind	[B]	Season
(iii)	Spring	[C]	Keeps changing
(iv)	Weather	[D]	Heats up water from rivers

- A. (i - C), (ii - D), (iii - B), (iv - A)  
B. (i - D), (ii - A), (iii - B), (iv - C)  
C. (i - C), (ii - A), (iii - D), (iv - B)  
D. (i - B), (ii - C), (iii - D), (iv - A)
16. A plant was kept in a dark room for 5 days. What will likely happen?  
A. it will grow faster  
B. it will become very healthy  
C. it may stop making food and turn yellow  
D. it will start eating insects
17. The time shown in the clock is \_\_\_\_\_.



- A. between 2 and 3 in the afternoon  
B. between 9 and 10 in the morning  
C. between 2 and 3 in the afternoon or in the night  
D. between 9 and 10 in the afternoon or in the night

18. Tarun is weighing some boxes as shown below.



What will happen if 'box X' is taken away from pan Q?

- A. pan P will go down.
  - B. pan Q will go down.
  - C. both pan P and pan Q will go down.
  - D. both pan P and pan Q will remain at the same place.
19. Oliver draws a flow chart.



Who is the producer here?

A. caterpillar	B. chameleon
C. leaf	D. snake

20. Which of the following is NOT a good reason to plant more trees?

- A. they give us oxygen
  - B. they make the air dirty
  - C. they provide shade and food
  - D. they help reduce pollution
21. Which of the following shows responsible use of water?
- A. using a hose to wash the car every day.
  - B. turning off the tap while brushing teeth.
  - C. playing in the water during summer.
  - D. letting the tap drip overnight.

22. Shown here is a bed. A net-like covering is hanging all around it.

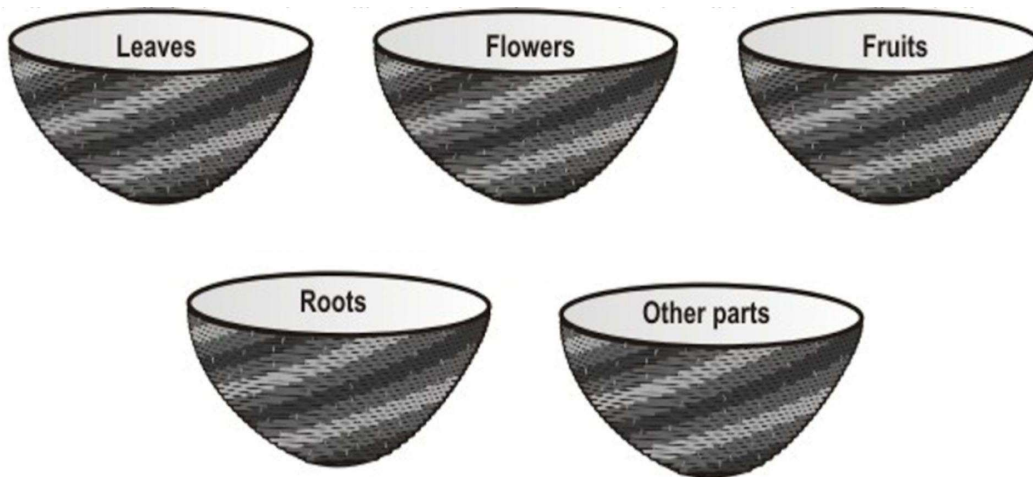


- What could be the use of this covering?
- A. to keep out insects
  - B. to keep out the light
  - C. to keep out the dust
  - D. to keep the person warm
23. Which of these looks like the shape given below?




- A. a ball
  - B. an ice-cube
  - C. a chalk piece
  - D. a light bulb
24. Why is it better to carry a cloth bag while shopping instead of a plastic bag?
- A. cloth bags look nicer
  - B. cloth bags are more expensive
  - C. plastic bags can be used only once
  - D. cloth bags are reusable and do not harm the environment
25. Which of the following animals is correctly matched with where it lives?
- A. cow – jungle
  - B. lion – farm
  - C. dog – house
  - D. elephant – city

26. Ramya has made 5 baskets as shown below.



Which of the following would you place in the 'other parts' basket?

- A. carrot
  - B. tomato
  - C. seeds
  - D. spinach
27. A teacher separated some pictures of living things in the following way:



The teacher has separated them into which of these groups?

- A. those that can fly and those that cannot
  - B. those that are heavy and those that are not
  - C. those that have four legs and those that do not
  - D. those that use sunlight to make food and those that do not
28. Which of the following pairs is correctly matched?
- A. roots – make food
  - B. flowers – absorb water
  - C. leaves – make food
  - D. stem – makes seeds
29. Which of these actions helps in keeping the environment clean?
- A. burning dry leaves
  - B. throwing waste in rivers
  - C. dumping garbage on the road
  - D. segregating dry and wet waste

30. A pelican is a type of bird that eats fish. It fills its beak with lots of water along with the fish. Then, it removes the water and eats the fish. Which of the following could be a pelican's beak?




31. Penguins live in large groups and sometimes, the young penguins get lost in this crowd. To find them, the mummy penguin and the papa penguin call out to their babies. Which of these senses is important for the babies to recognize their parents?
- A. hearing
  - B. smell
  - C. sight
  - D. taste
32. Plants are important to us because they \_\_\_\_\_
- A. make the soil dirty
  - B. take away oxygen
  - C. give us oxygen and food
  - D. make noise
33. Riya saw a bird drinking water from a small bowl on her balcony. What does this show?
- A. birds enjoy playing with water
  - B. animals can survive without water
  - C. birds also need water to live, just like humans
  - D. birds like living in houses


34. Manju kept an object near her kitchen stove while she was cooking. After some time, she saw that the shape of the object had changed because of the heat from the stove. What could the object have been made of?
- A. glass
  - B. wood
  - C. steel
  - D. wax
35. Dhara and Akshay were going through a book of animal pictures. They saw two animals that eat grass. Which two animals might they have seen?
- A. goat and tiger
  - B. tiger and lion
  - C. cow and leopard
  - D. buffalo and goat
36. Aquariums often have some water plants kept in them. What is the MAIN reason for this?
- A. The plants beautify the aquarium.
  - B. The plants serve as food for the fish.
  - C. The plants release oxygen needed by the fish.
  - D. The plants provide shade and shelter to the fish.
37. I was carried by pigeons in earlier times to send messages from one place to another. Who am I?
- A. mobile phone
  - B. e-mail
  - C. letter
  - D. SMS
38. Rohan saw a full moon on Monday.



If he checks three days later, on Thursday, what will the moon look like?



39. Which of these is a picture of a coconut tree trunk?



A. B. C. D.

40. Changes in the seasons are caused by:

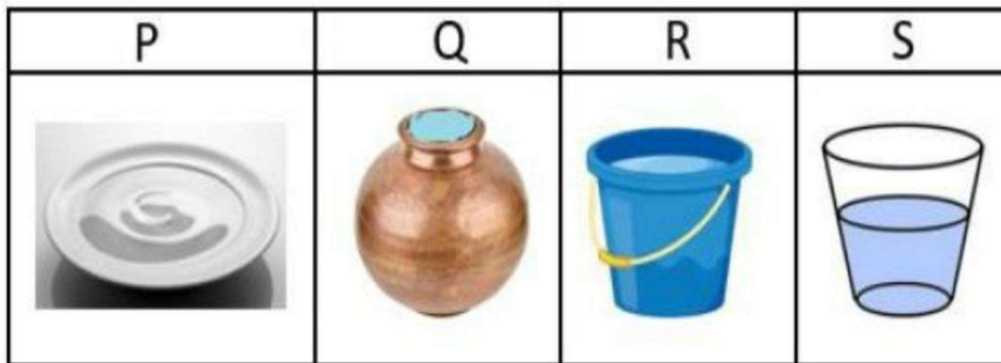
- A. rotation of the Earth around itself
- B. revolution of the Earth around the sun
- C. sunlight and darkness
- D. rotation of the Sun around itself

41. Shown here are different types of leaves.



Which of these leaves are usually eaten by humans?

- A. only the spinach leaf
  - B. only the coriander leaf and the banana leaf
  - C. only the mint leaf, the coriander leaf and the spinach leaf
  - D. only the spinach leaf, the mango leaf and the banana leaf
42. Children playing cricket near Kavita's house broke her glass window panes with the ball many times. So, she changed her glass panes to wooden ones. What will be different in the house when the wooden windows are closed, compared to earlier?
- A. the amount of breeze entering
  - B. the number of flies entering
  - C. the amount of light entering
  - D. the amount of dust entering
43. \_\_\_\_\_ motion will be travelled by a person sitting in a giant wheel.
- A. zig zag
  - B. linear
  - C. irregular
  - D. circular
44. We can send a written message by:
- A. radio
  - B. television
  - C. fax Machine
  - D. piano
45. Four containers with water are shown below. In which of them the rate of evaporation will be the fastest?



- A. P
  - B. R
  - C. C
  - D. S
46. The tail of a bird helps it to \_\_\_\_\_.
- A. fly fast
  - B. change direction
  - C. fly slow
  - D. fly high

47. Which statement among the following is not true about land transport?
- A. it is the most common means of transport.
  - B. it is the oldest means of transport.
  - C. it includes rail and road transport.
  - D. water is used as a medium for land transport
48. I work as a speaker as well as a listener at a time and I am used for communication. Who am I?
- A. e-mail
  - B. fax
  - C. telephone
  - D. letter
49. Ajay and Vijay were playing a game. Ajay had a box that he had covered with a thick towel. Vijay put his hand into the box and without looking into it, told Ajay there was a ball in the box.

How could he correctly say that there was a ball in the box?

- A. from its shape
  - B. from its size
  - C. from its weight
  - D. from its colour
50. Raju's doctor checked him using the instrument shown below. What did he check?



- A. his temperature
- B. his heartbeat
- C. his weight
- D. his height

## OMR Answer Sheet (EVS)

Name of Student: \_\_\_\_\_

Class: \_\_\_\_\_ Section: \_\_\_\_\_ Subject: \_\_\_\_\_

1. (A) (B) (C) (D)	17. (A) (B) (C) (D)	34. (A) (B) (C) (D)
2. (A) (B) (C) (D)	18. (A) (B) (C) (D)	35. (A) (B) (C) (D)
3. (A) (B) (C) (D)	19. (A) (B) (C) (D)	36. (A) (B) (C) (D)
4. (A) (B) (C) (D)	20. (A) (B) (C) (D)	37. (A) (B) (C) (D)
5. (A) (B) (C) (D)	21. (A) (B) (C) (D)	38. (A) (B) (C) (D)
6. (A) (B) (C) (D)	22. (A) (B) (C) (D)	39. (A) (B) (C) (D)
7. (A) (B) (C) (D)	23. (A) (B) (C) (D)	40. (A) (B) (C) (D)
8. (A) (B) (C) (D)	24. (A) (B) (C) (D)	41. (A) (B) (C) (D)
9. (A) (B) (C) (D)	25. (A) (B) (C) (D)	42. (A) (B) (C) (D)
10. (A) (B) (C) (D)	26. (A) (B) (C) (D)	43. (A) (B) (C) (D)
11. (A) (B) (C) (D)	27. (A) (B) (C) (D)	44. (A) (B) (C) (D)
12. (A) (B) (C) (D)	28. (A) (B) (C) (D)	45. (A) (B) (C) (D)
13. (A) (B) (C) (D)	29. (A) (B) (C) (D)	46. (A) (B) (C) (D)
14. (A) (B) (C) (D)	30. (A) (B) (C) (D)	47. (A) (B) (C) (D)
15. (A) (B) (C) (D)	31. (A) (B) (C) (D)	48. (A) (B) (C) (D)
16. (A) (B) (C) (D)	32. (A) (B) (C) (D)	49. (A) (B) (C) (D)
	33. (A) (B) (C) (D)	50. (A) (B) (C) (D)